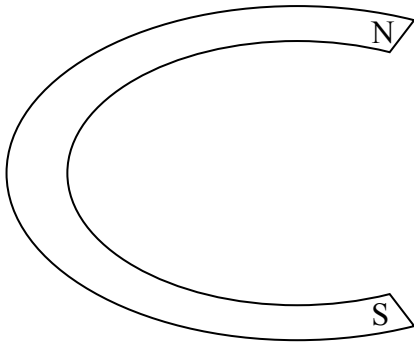


Name \_\_\_\_\_ Period \_\_\_\_\_

Physics Magnetism Quiz #2

]Sketch the magnetic field for each magnet or set of magnets.



1.



2.



3.



4.

